

New Edition: Updated to 2018 Exam Design Standards

# GEOTECHNICAL

E-Book 80 solved problems for  
Depth Exam ( Evening Session)



Abul K. Howlader, PE, MsCE  
Presented by PE Civil Exam

**PE Civil Exam 80– Geotechnical Questions & Answers (pdf Format)  
For Depth Exam (Evening Session)**

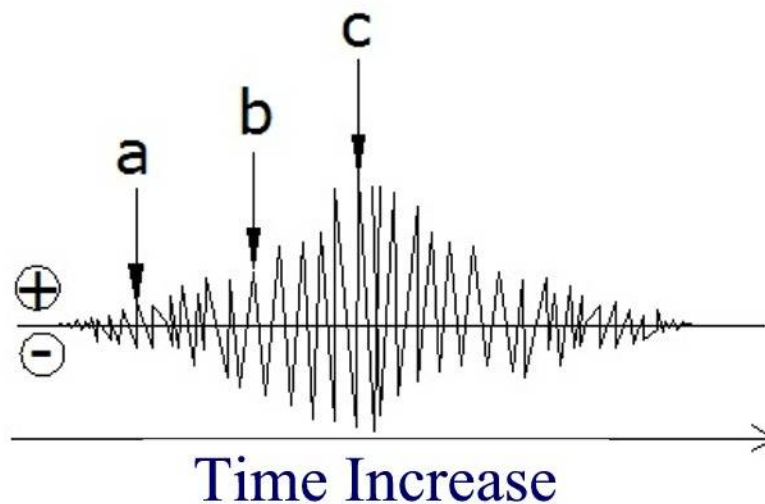
**PE Civil Depth Exam (Evening Session): This practice exam contains 80– Geotechnical questions, and answers each set from all Geotechnical & Soil Foundation Engineering:**

<b>Table Contents:</b>	<b>Page</b>
<b>I. Site Characterization: Number of Questions–10</b>	<b>4</b>
<b>II. Soil Mechanics, Laboratory Testing, and Analysis: Number of Questions–10</b>	<b>13</b>
<b>III. Field Materials Testing, Methods, and Safety: Number of Questions–6</b>	<b>24</b>
<b>IV. Earthquake Engineering, and Dynamic Loads: Number of Questions–4</b>	<b>30</b>
<b>V. Earth Structures: Number of Questions–8</b>	<b>34</b>
<b>VI. Groundwater, and Seepage: Number of Questions–6</b>	<b>43</b>
<b>VII. Problematic Soil, and Rock Conditions: Number of Questions–6</b>	<b>49</b>
<b>VIII. Earth Retaining Structures (ASD or LRFD: Number of Questions–10</b>	<b>54</b>
<b>IX. Shallow Foundations (ASD or LRFD) : Number of Questions–10</b>	<b>67</b>
<b>X. Deep Foundations (ASD or LRFD) : Number of Questions–10</b>	<b>79</b>

4. **PROBLEM** (Geophysics)

In the following diagram, which waves arrive at the interval labeled at c?

- a. S-wave
- b. P-wave
- c. Rayleigh wave
- d. surface wave



4. **SOLUTION:**

At **a** P-waves arrival, this type of seismic wave that compresses, and expands the ground.

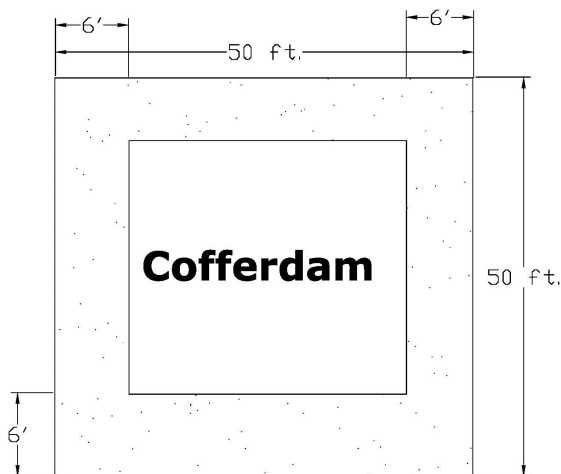
At **b** S-waves arrival, this type of seismic wave that moves the ground up to down, and side to side.

At **c** waves arrive, this type of seismic wave come to surface that forms when P-waves, and S-waves reach Earth's surface.

**The Correct Answer is: (d)**

58. **PROBLEM** (Cofferdams)

A square cofferdam is 50 ft on each side, and it has placed in the lake to permit dry construction of a bridge pier. The coffer dam consists of two square sheets pile enclosure. The inner enclosure separated on all sides from the outer one by 6 ft. The bottom of the lake is practically impermeable. The space between sheet pile has filled with soil that showed a permeability of 0.035 ft/day in a laboratory test. Assuming the sheet pile was not water tight, and the lake surface was 20 ft above the lake bottom. How much water per day is to be pumped from the excavation to keep the cofferdam dry?



- a  $Q = 1645.00$  gal/day
- b  $Q = 2653.00$  gal/day
- c  $Q = 678.00$  gal/day
- d.  $Q = 177.00$  gal/day

58. SOLUTION:

Coefficient of permeability,  $k = 0.035 \text{ ft /day}$

Seepage Surface area,

$$A = (50 - 12) \times 4 \times 20 = 3040 \text{ ft}^2$$

$$H = 20 \text{ ft}$$

$$L = 6 \text{ ft}$$

$$i = H/L = 20/6 = 3.33$$

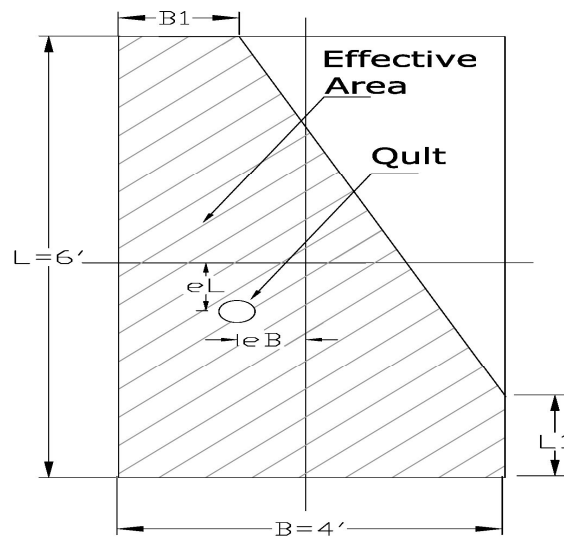
$$Q = VA = KiA = .035 \times 3.33 \times 3040 = 354.66 \text{ ft}^3/\text{day}$$

$$Q = 354.66 \times 7.48 = 2652.90 \text{ gal/day} \quad (1 \text{ ft}^3 = 7.48 \text{ gal})$$

The Correct Answer is: (b)

64. PROBLEM (Bearing Capacity)

Determine the ultimate load of a rectangular footing 6' x 4' with eccentric shown in Figure where, Soil Unit Weight,  $\gamma = 118 \text{ lb/ft}^3$ , Ultimate Bearing Capacity,  $q'_u = 2000 \text{ lb/ft}^2$ ,  $eB = .5'$ ,  $eL = .75'$ ,  $L1 = 1.0'$ , and  $B1 = 0.68'$ .



- a 15.0 Kip
- b 48.0 Kip
- c 28.0 Kip
- d 31.0 Kip

63. SOLUTION:

Where,  $eL/L = .75/6 = 0.125 < 1/6$ ,  $eB/B = .5/4 = 0.125 < 1/6$ ;

Therefore,

$$A' = L1B + 1/2\{(B+B1)(L-L1)\} = 1 \times 4 + 1/2\{(4+.68)(6-1)\} = 15.700 \text{ ft}^2$$

$$q'_u = 2000 \text{ lb/ft}^2$$

$$Q_{ult} = A' \times q'_u = 15.7 \times 2000 = 31400.00 = 31.4 \text{ Kip}$$

The Correct Answer is: (d)

**X. Deep Foundations (ASD or LRFD) : Number of Questions 10**

- A. Single-element axial capacity (e.g., driven pile, drilled shaft, micropile, helical screw piles, auger cast piles)
- B. Lateral load, and deformation analysis
- C. Single-element settlement
- D. Down drag
- E. Group effects (e.g., axial capacity, settlement, lateral deflection)
- F. Installation methods/hammer selection
- G. Pile dynamics (e.g., wave equation, high-strain dynamic testing, signal matching)
- H. Pile, and drilled-shaft load testing
- I. Integrity testing methods (e.g., low-strain impact integrity testing, ultrasonic cross-hole testing, coring, thermal integrity testing)

**71. PROBLEM (Single-element axial capacity)**

A 16 in diameter concrete pile is driven 40 ft into soft clay. Where,  $C=900$  psf., and friction coefficient,  $\alpha=0.80$ . Determine the Ultimate pile capacity.

- a 132.00 Kip
- b 107.00 Kip
- c 190.00 Kip
- d 120.00 Kip

**71. SOLUTION:**

$$C=900 \text{ psf.}, D=16", L=40 \text{ ft}, \alpha=0.80, A_{\text{tip}} = \pi/4(16/12)^2=1.40 \text{ ft}^2$$

$$Q_{\text{ult}} = Q_{\text{tip}} + Q_{\text{friction}}$$

$$Q_{\text{tip}} = 9CA_{\text{tip}} = 9 \times 900 \times 1.40 = 11304.00 \text{ \#} = 11.30 \text{ Kip}$$

$$Q_{\text{friction}} = \alpha CA_{\text{surface}} = 0.80 \times 900 \times (\pi DL)$$

$$Q_{\text{friction}} = 0.80 \times 900 \times (3.14 \times 16/12 \times 40) = 120576.00 \text{ \#} = 120.58 \text{ Kip}$$

$$Q_{\text{ult}} = Q_{\text{tip}} + Q_{\text{friction}} = 11.30 + 120.58 = 131.88 \text{ Kip}$$

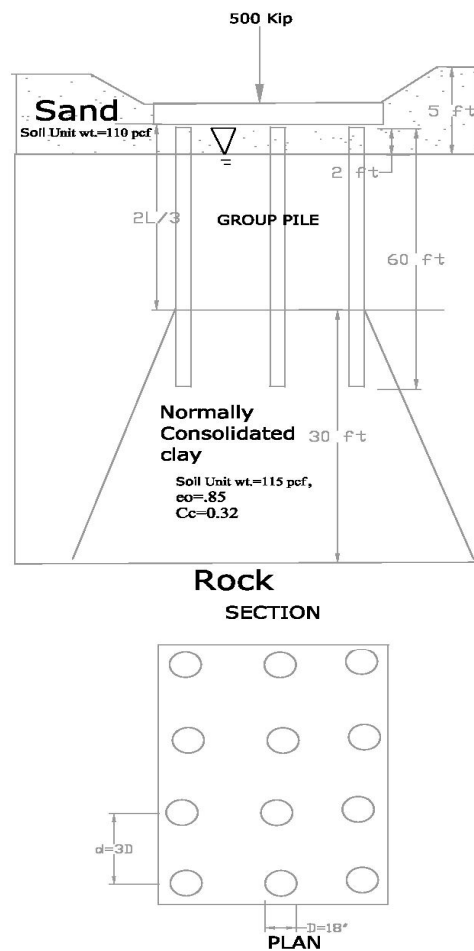
**The Correct Answer is: (a)**



80. PROBLEM (Pile Group Settlement)

Determine the consolidation settlement in the clay layer of the pile group. Each pile has an 18-inch diameter, and 60 ft long as shown in the Figure.

- a 0.40 ft
- b 0.60 ft
- c 0.90 ft
- d 1.10 ft



**80. SOLUTION:**

Where,  $Q_g = 500 \text{ Kip}$ ,  $n_1 = 4$ ,  $n_2 = 3$ ,  $d = 3D$ ,  $D = 18'' = 1.5'$ ,  $C_c = 0.32$ ,  $e_0 = .85$

$$d = 3 \times 1.5 = 4.5 \text{ ft}$$

$$L_g = (n_1 - 1)d + 2(D/2) = (4 - 1)4.5 + 2(1.5/2) = 15$$

$$B_g = (n_2 - 1)d + 2(D/2) = (3 - 1)4.5 + 2(1.5/2) = 10.5$$

$$H_1 = 30$$

$$Z = H_1 / 2 = 30 / 2 = 15 \text{ ft}$$

$$\Delta \delta' = Q_g / (L_g + z)(B_g + z) = 500 / (15 + 15)(10.5 + 15) = 0.65 \text{ Kip/ft}^2$$

$$\therefore \delta' = 5 \times 110 + (40 - 2 + 30/2)(115 - 62.4)$$

$$= 550 + (38 + 15) \times 52.5 = 3332.5 \text{ lb/ft}^2 = 3.33 \text{ Kip/ft}^2$$

$$\Delta S = \{C_c H_1 / (1 + e_0)\} \log[(\delta' + \Delta \delta') / \delta']$$

$\therefore$  Settlement,

$$\Delta S = \{0.32 \times 30 / (1 + .85)\} \log[(3.33 + 0.65) / 3.33] = 5.19 \times 0.08 = 0.40 \text{ ft}$$

**The Correct Answer is: (a)**